



Find 1 number that will fill in both blanks.

Answers

1) $10 = \underline{\quad} + \underline{\quad}$

1. _____

2) $12 = \underline{\quad} + \underline{\quad}$

2. _____

3) $20 = \underline{\quad} + \underline{\quad}$

3. _____

4) $4 = \underline{\quad} + \underline{\quad}$

4. _____

5) $6 = \underline{\quad} + \underline{\quad}$

5. _____

6) $14 = \underline{\quad} + \underline{\quad}$

6. _____

7) $8 = \underline{\quad} + \underline{\quad}$

7. _____

8) $18 = \underline{\quad} + \underline{\quad}$

8. _____

9) $16 = \underline{\quad} + \underline{\quad}$

9. _____

10) $2 = \underline{\quad} + \underline{\quad}$

10. _____



Find 1 number that will fill in both blanks.

1) $10 = \underline{5} + \underline{5}$

2) $12 = \underline{6} + \underline{6}$

3) $20 = \underline{10} + \underline{10}$

4) $4 = \underline{2} + \underline{2}$

5) $6 = \underline{3} + \underline{3}$

6) $14 = \underline{7} + \underline{7}$

7) $8 = \underline{4} + \underline{4}$

8) $18 = \underline{9} + \underline{9}$

9) $16 = \underline{8} + \underline{8}$

10) $2 = \underline{1} + \underline{1}$

Answers1. 52. 63. 104. 25. 36. 77. 48. 99. 810. 1



Find 1 number that will fill in both blanks.

Answers

1) $16 = \underline{\quad} + \underline{\quad}$

1. _____

2) $4 = \underline{\quad} + \underline{\quad}$

2. _____

3) $8 = \underline{\quad} + \underline{\quad}$

3. _____

4) $6 = \underline{\quad} + \underline{\quad}$

4. _____

5) $10 = \underline{\quad} + \underline{\quad}$

5. _____

6) $18 = \underline{\quad} + \underline{\quad}$

6. _____

7) $2 = \underline{\quad} + \underline{\quad}$

7. _____

8) $12 = \underline{\quad} + \underline{\quad}$

8. _____

9) $20 = \underline{\quad} + \underline{\quad}$

9. _____

10) $14 = \underline{\quad} + \underline{\quad}$

10. _____



Find 1 number that will fill in both blanks.

1) $16 = \underline{8} + \underline{8}$

2) $4 = \underline{2} + \underline{2}$

3) $8 = \underline{4} + \underline{4}$

4) $6 = \underline{3} + \underline{3}$

5) $10 = \underline{5} + \underline{5}$

6) $18 = \underline{9} + \underline{9}$

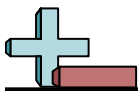
7) $2 = \underline{1} + \underline{1}$

8) $12 = \underline{6} + \underline{6}$

9) $20 = \underline{10} + \underline{10}$

10) $14 = \underline{7} + \underline{7}$

Answers1. 82. 23. 44. 35. 56. 97. 18. 69. 1010. 7



Find 1 number that will fill in both blanks.

Answers

1) $6 = \underline{\quad} + \underline{\quad}$

1. _____

2) $20 = \underline{\quad} + \underline{\quad}$

2. _____

3) $18 = \underline{\quad} + \underline{\quad}$

3. _____

4) $2 = \underline{\quad} + \underline{\quad}$

4. _____

5) $12 = \underline{\quad} + \underline{\quad}$

5. _____

6) $16 = \underline{\quad} + \underline{\quad}$

6. _____

7) $10 = \underline{\quad} + \underline{\quad}$

7. _____

8) $14 = \underline{\quad} + \underline{\quad}$

8. _____

9) $8 = \underline{\quad} + \underline{\quad}$

9. _____

10) $4 = \underline{\quad} + \underline{\quad}$

10. _____



Find 1 number that will fill in both blanks.

1) $6 = \underline{3} + \underline{3}$

2) $20 = \underline{10} + \underline{10}$

3) $18 = \underline{9} + \underline{9}$

4) $2 = \underline{1} + \underline{1}$

5) $12 = \underline{6} + \underline{6}$

6) $16 = \underline{8} + \underline{8}$

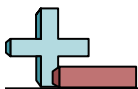
7) $10 = \underline{5} + \underline{5}$

8) $14 = \underline{7} + \underline{7}$

9) $8 = \underline{4} + \underline{4}$

10) $4 = \underline{2} + \underline{2}$

Answers1. 32. 103. 94. 15. 66. 87. 58. 79. 410. 2



Find 1 number that will fill in both blanks.

Answers

1) $10 = \underline{\quad} + \underline{\quad}$

1. _____

2) $4 = \underline{\quad} + \underline{\quad}$

2. _____

3) $2 = \underline{\quad} + \underline{\quad}$

3. _____

4) $18 = \underline{\quad} + \underline{\quad}$

4. _____

5) $12 = \underline{\quad} + \underline{\quad}$

5. _____

6) $20 = \underline{\quad} + \underline{\quad}$

6. _____

7) $6 = \underline{\quad} + \underline{\quad}$

7. _____

8) $14 = \underline{\quad} + \underline{\quad}$

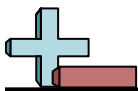
8. _____

9) $8 = \underline{\quad} + \underline{\quad}$

9. _____

10) $16 = \underline{\quad} + \underline{\quad}$

10. _____



Find 1 number that will fill in both blanks.

1) $10 = \underline{5} + \underline{5}$

2) $4 = \underline{2} + \underline{2}$

3) $2 = \underline{1} + \underline{1}$

4) $18 = \underline{9} + \underline{9}$

5) $12 = \underline{6} + \underline{6}$

6) $20 = \underline{10} + \underline{10}$

7) $6 = \underline{3} + \underline{3}$

8) $14 = \underline{7} + \underline{7}$

9) $8 = \underline{4} + \underline{4}$

10) $16 = \underline{8} + \underline{8}$

Answers1. 52. 23. 14. 95. 66. 107. 38. 79. 410. 8



Find 1 number that will fill in both blanks.

Answers

1) $20 = \underline{\quad} + \underline{\quad}$

1. _____

2) $6 = \underline{\quad} + \underline{\quad}$

2. _____

3) $2 = \underline{\quad} + \underline{\quad}$

3. _____

4) $10 = \underline{\quad} + \underline{\quad}$

4. _____

5) $8 = \underline{\quad} + \underline{\quad}$

5. _____

6) $12 = \underline{\quad} + \underline{\quad}$

6. _____

7) $4 = \underline{\quad} + \underline{\quad}$

7. _____

8) $16 = \underline{\quad} + \underline{\quad}$

8. _____

9) $18 = \underline{\quad} + \underline{\quad}$

9. _____

10) $14 = \underline{\quad} + \underline{\quad}$

10. _____



Find 1 number that will fill in both blanks.

1) $20 = \underline{10} + \underline{10}$

2) $6 = \underline{3} + \underline{3}$

3) $2 = \underline{1} + \underline{1}$

4) $10 = \underline{5} + \underline{5}$

5) $8 = \underline{4} + \underline{4}$

6) $12 = \underline{6} + \underline{6}$

7) $4 = \underline{2} + \underline{2}$

8) $16 = \underline{8} + \underline{8}$

9) $18 = \underline{9} + \underline{9}$

10) $14 = \underline{7} + \underline{7}$

Answers1. 102. 33. 14. 55. 46. 67. 28. 89. 910. 7



Find 1 number that will fill in both blanks.

Answers

1) $12 = \underline{\quad} + \underline{\quad}$

1. _____

2) $18 = \underline{\quad} + \underline{\quad}$

2. _____

3) $16 = \underline{\quad} + \underline{\quad}$

3. _____

4) $8 = \underline{\quad} + \underline{\quad}$

4. _____

5) $14 = \underline{\quad} + \underline{\quad}$

5. _____

6) $6 = \underline{\quad} + \underline{\quad}$

6. _____

7) $2 = \underline{\quad} + \underline{\quad}$

7. _____

8) $4 = \underline{\quad} + \underline{\quad}$

8. _____

9) $20 = \underline{\quad} + \underline{\quad}$

9. _____

10) $10 = \underline{\quad} + \underline{\quad}$

10. _____



Find 1 number that will fill in both blanks.

1) $12 = \underline{6} + \underline{6}$

2) $18 = \underline{9} + \underline{9}$

3) $16 = \underline{8} + \underline{8}$

4) $8 = \underline{4} + \underline{4}$

5) $14 = \underline{7} + \underline{7}$

6) $6 = \underline{3} + \underline{3}$

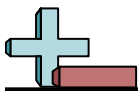
7) $2 = \underline{1} + \underline{1}$

8) $4 = \underline{2} + \underline{2}$

9) $20 = \underline{10} + \underline{10}$

10) $10 = \underline{5} + \underline{5}$

Answers1. 62. 93. 84. 45. 76. 37. 18. 29. 1010. 5



Find 1 number that will fill in both blanks.

Answers

1) $2 = \underline{\quad} + \underline{\quad}$

1. _____

2) $8 = \underline{\quad} + \underline{\quad}$

2. _____

3) $18 = \underline{\quad} + \underline{\quad}$

3. _____

4) $16 = \underline{\quad} + \underline{\quad}$

4. _____

5) $6 = \underline{\quad} + \underline{\quad}$

5. _____

6) $10 = \underline{\quad} + \underline{\quad}$

6. _____

7) $14 = \underline{\quad} + \underline{\quad}$

7. _____

8) $20 = \underline{\quad} + \underline{\quad}$

8. _____

9) $12 = \underline{\quad} + \underline{\quad}$

9. _____

10) $4 = \underline{\quad} + \underline{\quad}$

10. _____



Find 1 number that will fill in both blanks.

1) $2 = \underline{1} + \underline{1}$

2) $8 = \underline{4} + \underline{4}$

3) $18 = \underline{9} + \underline{9}$

4) $16 = \underline{8} + \underline{8}$

5) $6 = \underline{3} + \underline{3}$

6) $10 = \underline{5} + \underline{5}$

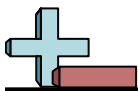
7) $14 = \underline{7} + \underline{7}$

8) $20 = \underline{10} + \underline{10}$

9) $12 = \underline{6} + \underline{6}$

10) $4 = \underline{2} + \underline{2}$

Answers1. 12. 43. 94. 85. 36. 57. 78. 109. 610. 2



Find 1 number that will fill in both blanks.

Answers

1) $2 = \underline{\quad} + \underline{\quad}$

1. _____

2) $4 = \underline{\quad} + \underline{\quad}$

2. _____

3) $10 = \underline{\quad} + \underline{\quad}$

3. _____

4) $8 = \underline{\quad} + \underline{\quad}$

4. _____

5) $20 = \underline{\quad} + \underline{\quad}$

5. _____

6) $16 = \underline{\quad} + \underline{\quad}$

6. _____

7) $14 = \underline{\quad} + \underline{\quad}$

7. _____

8) $18 = \underline{\quad} + \underline{\quad}$

8. _____

9) $12 = \underline{\quad} + \underline{\quad}$

9. _____

10) $6 = \underline{\quad} + \underline{\quad}$

10. _____



Find 1 number that will fill in both blanks.

1) $2 = \underline{1} + \underline{1}$

2) $4 = \underline{2} + \underline{2}$

3) $10 = \underline{5} + \underline{5}$

4) $8 = \underline{4} + \underline{4}$

5) $20 = \underline{10} + \underline{10}$

6) $16 = \underline{8} + \underline{8}$

7) $14 = \underline{7} + \underline{7}$

8) $18 = \underline{9} + \underline{9}$

9) $12 = \underline{6} + \underline{6}$

10) $6 = \underline{3} + \underline{3}$

Answers1. 12. 23. 54. 45. 106. 87. 78. 99. 610. 3



Find 1 number that will fill in both blanks.

Answers

1) $10 = \underline{\quad} + \underline{\quad}$

1. _____

2) $12 = \underline{\quad} + \underline{\quad}$

2. _____

3) $6 = \underline{\quad} + \underline{\quad}$

3. _____

4) $2 = \underline{\quad} + \underline{\quad}$

4. _____

5) $18 = \underline{\quad} + \underline{\quad}$

5. _____

6) $4 = \underline{\quad} + \underline{\quad}$

6. _____

7) $20 = \underline{\quad} + \underline{\quad}$

7. _____

8) $16 = \underline{\quad} + \underline{\quad}$

8. _____

9) $8 = \underline{\quad} + \underline{\quad}$

9. _____

10) $14 = \underline{\quad} + \underline{\quad}$

10. _____



Find 1 number that will fill in both blanks.

1) $10 = \underline{5} + \underline{5}$

2) $12 = \underline{6} + \underline{6}$

3) $6 = \underline{3} + \underline{3}$

4) $2 = \underline{1} + \underline{1}$

5) $18 = \underline{9} + \underline{9}$

6) $4 = \underline{2} + \underline{2}$

7) $20 = \underline{10} + \underline{10}$

8) $16 = \underline{8} + \underline{8}$

9) $8 = \underline{4} + \underline{4}$

10) $14 = \underline{7} + \underline{7}$

Answers1. 52. 63. 34. 15. 96. 27. 108. 89. 410. 7



Find 1 number that will fill in both blanks.

Answers

1) $2 = \underline{\quad} + \underline{\quad}$

1. _____

2) $18 = \underline{\quad} + \underline{\quad}$

2. _____

3) $10 = \underline{\quad} + \underline{\quad}$

3. _____

4) $20 = \underline{\quad} + \underline{\quad}$

4. _____

5) $14 = \underline{\quad} + \underline{\quad}$

5. _____

6) $8 = \underline{\quad} + \underline{\quad}$

6. _____

7) $16 = \underline{\quad} + \underline{\quad}$

7. _____

8) $6 = \underline{\quad} + \underline{\quad}$

8. _____

9) $4 = \underline{\quad} + \underline{\quad}$

9. _____

10) $12 = \underline{\quad} + \underline{\quad}$

10. _____



Find 1 number that will fill in both blanks.

1) $2 = \underline{1} + \underline{1}$

2) $18 = \underline{9} + \underline{9}$

3) $10 = \underline{5} + \underline{5}$

4) $20 = \underline{10} + \underline{10}$

5) $14 = \underline{7} + \underline{7}$

6) $8 = \underline{4} + \underline{4}$

7) $16 = \underline{8} + \underline{8}$

8) $6 = \underline{3} + \underline{3}$

9) $4 = \underline{2} + \underline{2}$

10) $12 = \underline{6} + \underline{6}$

Answers1. 12. 93. 54. 105. 76. 47. 88. 39. 210. 6